



AAKAR PUBLIC SCHOOL

Summer
holiday
Homework

Student Name: _____

Class: **IV** _____

Session: **2026-27** _____



It's summer time, School vacation has begun, Time for children to play, And have fun in the sun.

*Now the children are out of school,
There are trees to climb, Swimming in the pool.
Time to spend, with special friends.*

Dear Student,


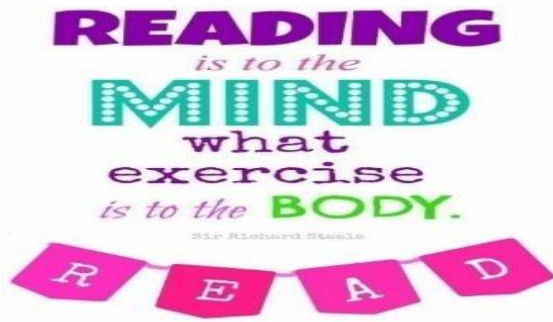
- Summer Vacation is the best and the most fruitful time for learning and nurturing creativity. Keeping this objective in mind we have planned diverse and exciting activities that will enhance your knowledge and boost your creativity.
- "Knowledge is Power". Therefore read lots and lots of books to cultivate the reading habit and develop your vocabulary, language skills, increase your attention span and improve your spellings.
- "A healthy mind lives in a healthy body". So go out and play the sport of your choice. It will help to instill discipline, generate sporting spirits and channelize your energies constructively.
- Get up early in the morning and see the rising sun. Go for a nature walk and feel the fresh air. Spend quality time with your elders and share your thoughts and ideas with them.
- Eat healthy food and drink lots of water during summer.
- Revise all the work done in the class. Revise the tables from 2- 16.
- Integrating curriculum helps students deepen their understanding of the subject matter and comprehend relationship between different areas of study. This year's holiday homework has been designed keeping this interdisciplinary aspect in mind. Health is a concern for everyone so, keeping this in mind we have designed your homework on the theme **"HEALTH AND FITNESS"**.

All homework should be handwritten and neatly done on A4 size sheets, stapled subject wise and put together in a common folder.

NOTE-The school will remain closed from 01.05.2026 to 30.06.2026 and will reopen on 01.07.2026 . Summer holidays homework has been uploaded on our school App: Edunext and WhatsApp group kindly go through it. The marks of holiday homework will be included in your Term-1 exam. Kindly deposit the holiday homework in July 1st week, later it will not be accepted by the class teacher.

*That time of year's come round again,
So we wish you all the best.
The joy that comes from knowing you
Makes us feel that we have been blessed.
So we'll share with you our feelings
At this special time of year:
May your holidays be a delight,
Filled with happiness and cheer.
HAPPY HOLIDAYS*


ENGLISH



1. Reading books is a pleasure. It has a joy of its own.

Read any of the novel by Ruskin Bond- "The Room on the Roof or The Blue Umbrella and write About your favourite character in about 80 - 100 words.

2. A **dictionary** can help you understand your subject better and improve your communication.



Prepare a dictionary having minimum 5 words of each alphabet (new words) with meaning to enhance the vocabulary. Cover it beautifully and put a book mark in it with a health quote written on book mark.

3. STORY TIME:



Sam is a sweet boy, but he doesn't like to brush his teeth. So one day his teeth decide to look for a new mouth, one that would take care of them.

Where did they go? Who did they meet? Did they find the perfect mouth?

Use your own imagination and complete the story in about 100-150 words. Give a suitable title to your story.

4. Compose a poem of 6-8 lines on the topic on "Cleanliness is next to Godliness". Try to frame something rhyming.

Power Up Crossword!

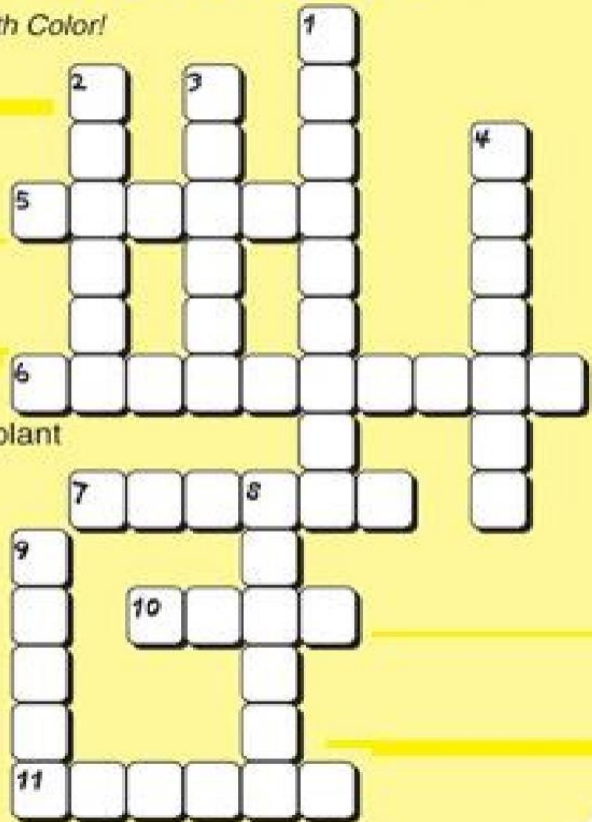
— Remember to Eat Right with Color!

Across Clues

5. A fruit and great source of vitamin C
6. A red fruit that shows its seeds
7. A person who grows fruits and vegetables
10. This green and yellow food grows in "ears"
11. It's considered a fruit and a vegetable

Down Clues

1. A food that comes from a stem, root or leaf of a plant
2. This orange vegetable helps you to see at night
3. This yellow fruit is also the world's largest herb
4. The name of this crossword!
8. Farmers _____, a place where locally grown fruits and vegetables are sold
9. A food developed from a flower and contains one or more seeds



Singular and Plural Worksheet

A. Write the plural form of these words

1. Cat → _____
2. Book → _____
3. Mango → _____
4. Baby → _____
5. Box → _____
6. Toy → _____
7. Bus → _____
8. Leaf → _____
9. Dish → _____
10. Story → _____

B. Write the singular form of these words

1. Dogs → _____
2. Apples → _____
3. Buses → _____
4. Babies → _____
5. Wolves → _____
6. Classes → _____
7. Leaves → _____
8. Brushes → _____
9. Cities → _____
10. Potatoes → _____

C. Fill in the blanks with the correct singular or plural word

1. There are many _____ in the park. (child/children)
2. The _____ is barking loudly. (dog/dogs)
3. I bought two _____. (dress/dresses)
4. The _____ are flying in the sky. (bird/birds)
5. One _____ is on the table. (apple/apples)


PLACE VALUE

EXPANDED FORM SNAKE



"Prepare a TLM on A4 size coloured paper using the given image as reference. Be creative and neat."

PLACE VALUE CHART



Write 4 Digit Number Expanded Form Worksheets

Section A: Write the Expanded Form

For each number given below, write it in its expanded form by breaking it down into thousands, hundreds, tens, and ones.

1. $7,819 = \underline{\hspace{2cm}} + \underline{\hspace{2cm}} + \underline{\hspace{2cm}} + \underline{\hspace{2cm}}$

2. $3,456 = \underline{\hspace{2cm}} + \underline{\hspace{2cm}} + \underline{\hspace{2cm}} + \underline{\hspace{2cm}}$

3. $9,021 = \underline{\hspace{2cm}} + \underline{\hspace{2cm}} + \underline{\hspace{2cm}} + \underline{\hspace{2cm}}$

4. $5,608 = \underline{\hspace{2cm}} + \underline{\hspace{2cm}} + \underline{\hspace{2cm}} + \underline{\hspace{2cm}}$

5. $2,222 = \underline{\hspace{2cm}} + \underline{\hspace{2cm}} + \underline{\hspace{2cm}} + \underline{\hspace{2cm}}$

Section B: Write the Standard Form

Read the expanded form and write the correct 4-digit number in the blank space.

1. $8000 + 300 + 40 + 5 = \underline{\hspace{2cm}}$

2. $1000 + 900 + 0 + 7 = \underline{\hspace{2cm}}$

3. $6000 + 0 + 50 + 2 = \underline{\hspace{2cm}}$

4. $4000 + 700 + 10 + 0 = \underline{\hspace{2cm}}$

5. $3000 + 300 + 30 + 3 = \underline{\hspace{2cm}}$



PLACE VALUE AND FACE VALUE WORKSHEET



Write the place value and the face value of the underlined digit

Number	Place Value	Face Value
① 7, <u>6</u> 35	<input type="text"/>	<input type="text"/>
② 8 <u>7</u> 3,936	<input type="text"/>	<input type="text"/>
③ 870,0 <u>14</u>	<input type="text"/>	<input type="text"/>
④ 90 <u>7</u> ,988	<input type="text"/>	<input type="text"/>
⑤ 38,5 <u>6</u> 0,894	<input type="text"/>	<input type="text"/>
⑥ 6,650,9 <u>34</u>	<input type="text"/>	<input type="text"/>
⑦ 44,560, <u>899</u>	<input type="text"/>	<input type="text"/>
⑧ 6 <u>8</u> ,088,786	<input type="text"/>	<input type="text"/>

Directions: Write the number names in words [use international place value system] .

1)	330774802	
2)	78471543	
3)	33112303	
4)	60572166	
5)	418991291	
6)	803489215	
7)	661261021	
8)	639640309	
9)	399015914	
10)	924951591	
11)	124210023	
12)	697376146	

Directions: Write the number names in words [use Indian place value system] .

1)	330774802	
2)	78471543	
3)	33112303	
4)	60572166	
5)	418991291	
6)	803489215	
7)	661261021	
8)	639640309	
9)	399015914	
10)	924951591	
11)	124210023	
12)	697376146	

SUBJECT - EVS

THE HUMAN BODY

1. Watch the video "[BBC Learning - Major Organs of the Human Body](#)" and complete the next sentences.

stomach brain kidneys skin heart liver lungs

- a) Your _____ does all your **thinking** and tells the other part of your body **what to do**.
- b) Your _____ **pumps blood** around your body.
- c) Your _____ **bring air** in and out of your body.
- d) Your _____ **digests** your food breaking it down.
- e) Your _____ **cleans** your blood.
- f) Your _____ **filter** the blood.
- g) Your _____ **holds** everything together in a protective waterproof layer.

2. Write the name of the major organs from the previous unit on the corresponding picture.



1. _____



2. _____



3. _____



4. _____



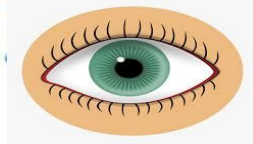
5. _____



6. _____

Which organ is missed? The organ missed is the _____

Human Body



Check the correct words to complete the sentences below.

1. The ____ is the control center for our body.



brain



heart

2. The ____ pumps blood around the body.



stomach



heart

3. We use our ____ to breathe.



heart



lungs

4. We need our ____ to digest food.



lungs



stomach

ANIMAL HABITAT

Q: Classify the animal below into their correct habitat:

				
Lion	arctic wolf	camel	octopus	tiger
				
moose	monkey	shark	giraffe	tortoise

Desert	Forest	Ocean	Grassland	Arctic

Enjoy some virtual field trips also

1. Online Zoo (Behind the Scenes)

- [San Antonio Zoo](#)
- [San Diego Zoo](#)
- [Cincinnati Zoo](#) (self-guided tours, live stream safari and feeding times)



2. Under the Sea Visit

Journey to [The Deep Sea](#).

3. NASA Commercial Crew Program

Learn more about [NASA's at-home STEM activities](#).

4. Historical sites with online experiences:

- [The Sistine Chapel](#)
- [The Taj Mahal](#)
- [Ellis Island](#)
- [Rock and Roll Hall of Fame](#)
- [Gettysburg Battlefield](#)

HINDI



1. 'खेलकूद और हमारा जीवन' विषय पर अपने विचार एक अनुच्छेद के रूप में लिखिए। (80-100 शब्दों में)
2. पचतंत्र / अकबर वीरबल / दादी-नानी की कहानियाँ / पराग/नंदन या कोई भी अपनी पसंद की पुस्तकें पढ़िए और कोई भी एक अपनी पसंद की कहानी को अपने शब्दों में लिखिए।

3. वर्ग पहेली

नीचे दिए गए संकेत बिंदुओं की सहायता से वर्ग पहेली पूरी करिए -

				4.			5.						
			2.				9.						
1.			8.										
			3.										
		7.											
6.													

ऊपर से नीचे:

1. एक ऐसी सवारी जो सबसे सस्ती है। दोपहिए की इस सवारी से पर्यावरण को कोई हानि नहीं पहुँचती।
2. व्यायाम की प्राचीन विधि जो आज भी काफी लोकप्रिय है।
3. यह अंदरूनी भी हो सकते हैं व बाहरी भी। हर किसी को इसमें आनंद आता है व कसरत भी हो जाती है।
5. भारी भरकम फल जिसे गरमी में खाने पर ताज़गी मिलती है।

बाएँ से दाएँ

4. एक प्रकार का खाना (फास्टफूड) जो हमें नहीं खाना चाहिए।
6. एक ऐसी क्रिया या खेल जो अक्सर बच्चे मैदान या पार्क में कद बढ़ाने के लिए करते हैं।
7. इसके बिना हम जीवित नहीं रह सकते। आजकल इसे बचाना बहुत ज़रूरी हो गया है।
8. यह मौसम बहुत सताता है लेकिन लम्बा अवकाश संग में लाता है।
9. घर का वह भाग जहाँ माँ हमारे लिए पोषक व स्वादिष्ट खाना बनाती हैं।

अपठित गद्यांश

हमारा पुस्तकालय

पुस्तकालय का अर्थ है पुस्तकें रखने का कक्षा। हर स्कूल और कॉलेज में पुस्तकालय होता है। पुस्तकालय में न केवल किताबें होती हैं, बल्कि अखबार, पत्र-पत्रिकाएँ, चार्ट आदि भी होते हैं। लोग पुस्तकालय में बैठकर मन-पसंद किताबें, अखबार और पत्र-पत्रिकाएँ पढ़ते हैं। हमारे स्कूल में एक बड़ा पुस्तकालय है। उसमें हिंदी अंग्रेजी, संस्कृत आदि भाषाओं की हजारों पुस्तकें, शब्दकोष, मानचित्र आदि हैं। बीच में एक बड़ी मेज़ है। हम वहीं बैठकर किताबें और पत्र-पत्रिकाएँ पढ़ते हैं। बुधवार को हमारी पुस्तकालय की कक्षा होती है। हमारे अध्यापक भी हमारे साथ आते हैं। हमें तस्वीरों वाली कहानी की किताबें पढ़ने में मजा आता है।

क. पुस्तकालय में क्या-क्या चीजें होती हैं-?

ख. बच्चे कहाँ बैठकर पढ़ते हैं?

ग. बच्चों को कैसी पुस्तकें पढ़ने में मजा आता है?

घ. पुस्तकालय किसे कहते हैं?

WORKSHEET



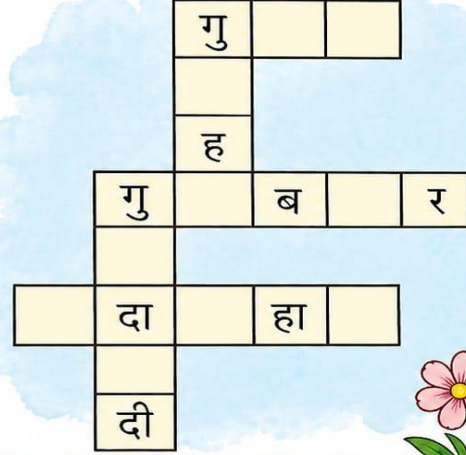
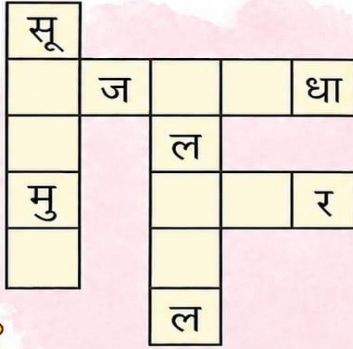
सोचो तो...

- सोचो तो, क्या होता यदि उपवन में रंग-बिरंगे फूल ही न होते ?
- सोचो तो, कमल को ही भारत का राष्ट्रीय फूल क्यों माना जाता है ?



खोजो और परखो

- फूलों के नाम लिखकर शब्द-पहेली पूरी कीजिए—



“चित्र को ध्यानपूर्वक देखकर बताइए कि उसमें क्या हो रहा है। ‘चतुर कौआ’ कहानी को अपने शब्दों में 10 वाक्यों में लिखिए।”



चतुर कौआ



COMPUTER

Worksheet - Input, Output, Storage Devices & Units of Memory

A. Fill in the blanks

1. A keyboard is an _____ device.
2. A monitor is an _____ device.
3. A hard disk is a _____ device.
4. The smallest unit of memory is a _____.
5. 1024 bytes make 1 _____.
6. A mouse helps us to _____ on the computer screen.
7. Speakers are used to hear _____.
8. A pen drive stores _____.
9. RAM and ROM are types of computer _____.
10. CPU stands for Central Processing _____.

B. Choose the correct answer

1. Which of these is an input device?
 Monitor
 Keyboard
 Speaker
2. Which device is used to print documents?
 Mouse
 Printer
 Scanner
3. Which is a storage device?
 Pen Drive
 Monitor
 Keyboard
4. What is the full form of KB?
 Kilo Byte
 Kilo Bit
 Key Board
5. Which unit is bigger?
 MB
 KB

6. Which of these is an output device?

- Speaker
- Mouse
- Scanner

7. Which device is used to type letters?

- Keyboard
- Monitor
- Printer

8. Which unit is smaller?

- GB
- KB
- TB

9. Which device stores data permanently?

- Hard Disk
- Monitor
- Speaker

10. Which of these is NOT a storage device?

- Pen Drive
- Hard Disk
- Printer

C. Write the name of the parts shown below

M _ N _ T _ R



M _ U _ E



K _ Y _ O _ R _



C _ U



_ P S



DANCE

Have to prepare dance on this song and record the video and send it to the class teacher.

- Ganesh Vandana - Vakrtunda Mahakaye Surya Koti Samarprabha

MUSIC

Have to learn this and prepare video and send it to the class teacher.

1. Mahamrityunjay Mantra
2. Song - Teri Hai Zameen Tera Aasman

ART & CRAFT

Make a doll with the use of newspaper.



Holiday Homework Marks Distribution

S.No.	Subject Name	Maximum Marks	Obtained Marks	Teacher's Signature
1	English	5		
2	Hindi	5		
3	Mathematics	5		
4	EVS	5		
5	Computer	5		

Note:

The Holiday Homework of each subject carries ****5 marks****, which will be included in the ****Term-1 Internal Assessment (IA)**** category. Students are advised to complete their work neatly and submit it on time.